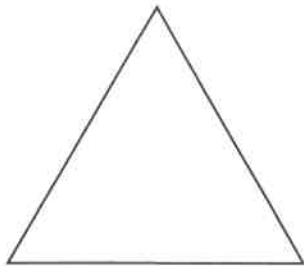


Lines of Symmetry

Name: _____ Date: _____


Draw as many lines of symmetry as you can.

1.




How many lines of symmetry?

2.




How many lines of symmetry?

3.



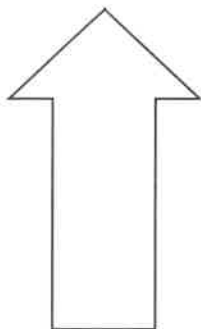
How many lines of symmetry?

4.



How many lines of symmetry?

5.



How many lines of symmetry?

Lines of Symmetry

Name: _____ Date: _____

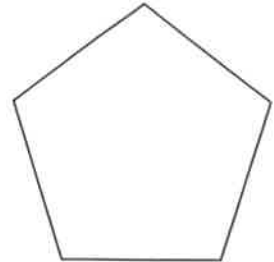
Draw as many lines of symmetry as you can.

1.




How many lines of symmetry?

2.



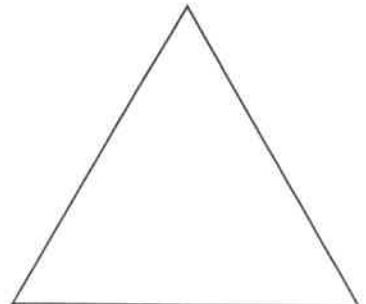
How many lines of symmetry?

3.



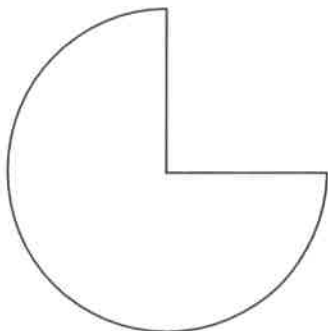
How many lines of symmetry?

4.



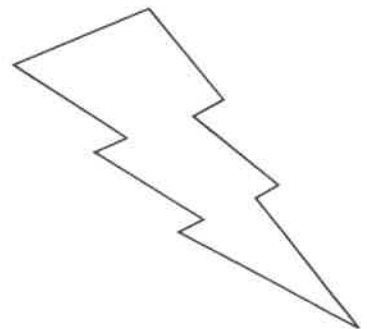
How many lines of symmetry?

5.



How many lines of symmetry?

6.



How many lines of symmetry?

Lines of Symmetry

Name: _____ Date: _____

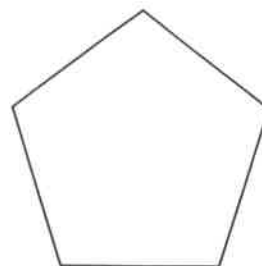
Draw as many lines of symmetry as you can.

1.




How many lines of symmetry?

2.



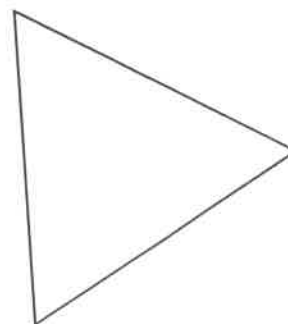
How many lines of symmetry?

3.



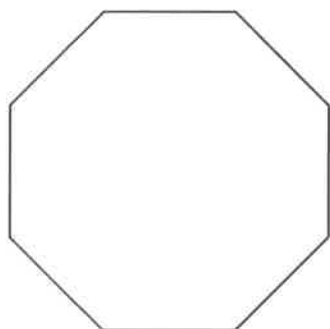
How many lines of symmetry?

4.



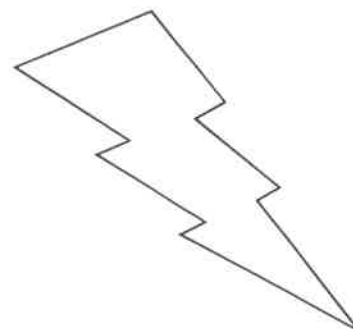
How many lines of symmetry?

5.



How many lines of symmetry?

6.



How many lines of symmetry?
