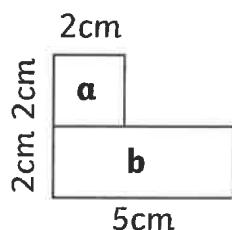


Area of Compound Shapes

I can calculate the area of compound shapes.

Calculate the area of each rectangle, then calculate the area of the whole compound shape.

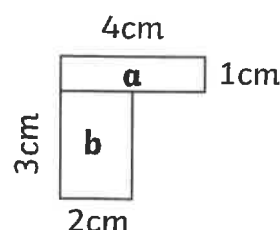
1.



Area a: _____ cm^2

Area b: _____ cm^2 Total: _____ cm^2

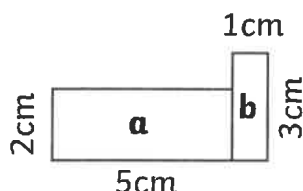
2.



Area a: _____ cm^2

Area b: _____ cm^2 Total: _____ cm^2

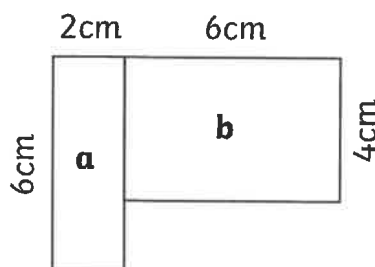
3.



Area a: _____ cm^2

Area b: _____ cm^2 Total: _____ cm^2

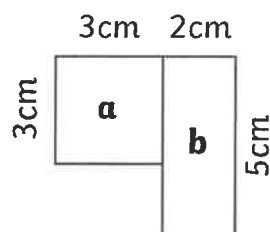
4.



Area a: _____ cm^2

Area b: _____ cm^2 Total: _____ cm^2

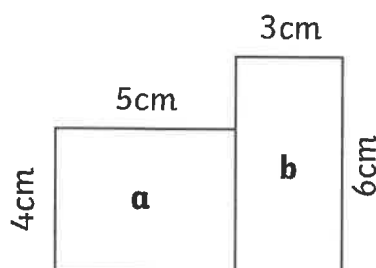
5.



Area a: _____ cm^2

Area b: _____ cm^2 Total: _____ cm^2

6.



Area a: _____ cm^2

Area b: _____ cm^2 Total: _____ cm^2

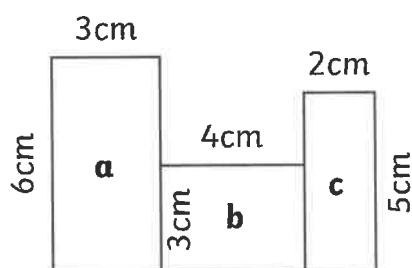
Note: Compound shapes are not to scale.

Area of Compound Shapes

I can calculate the area of compound shapes.

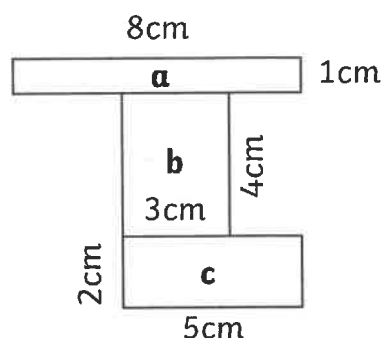
Calculate the area of each rectangle, then calculate the area of the whole compound shape.

7.



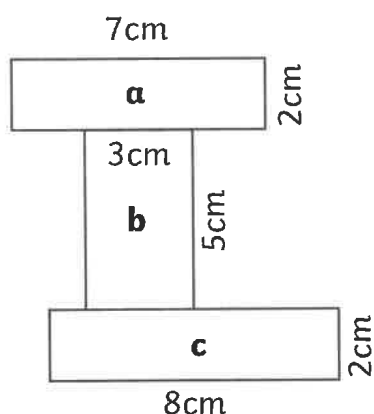
Area a: _____ cm^2 Area c: _____ cm^2
 Area b: _____ cm^2 Total: _____ cm^2

8.



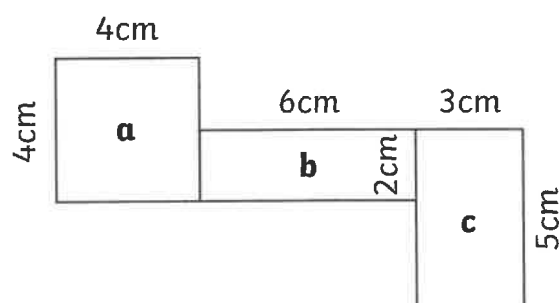
Area a: _____ cm^2 Area c: _____ cm^2
 Area b: _____ cm^2 Total: _____ cm^2

9.



Area a: _____ cm^2 Area c: _____ cm^2
 Area b: _____ cm^2 Total: _____ cm^2

10.



Area a: _____ cm^2 Area c: _____ cm^2
 Area b: _____ cm^2 Total: _____ cm^2

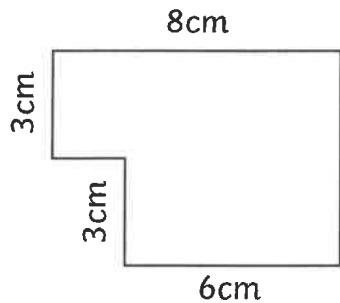
Note: Compound shapes are not to scale.

Area of Compound Shapes

I can calculate the area of compound shapes.

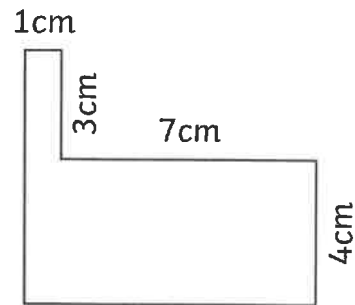
Identify the shapes where the area can be calculated. Calculate the area of each compound shape.

1.



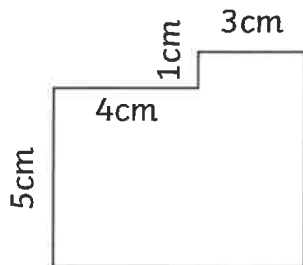
Total: _____

2.



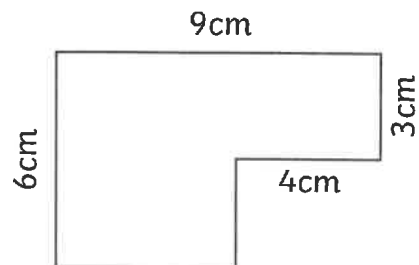
Total: _____

3.



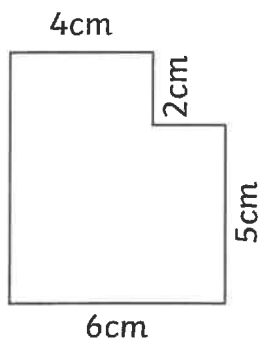
Total: _____

4.



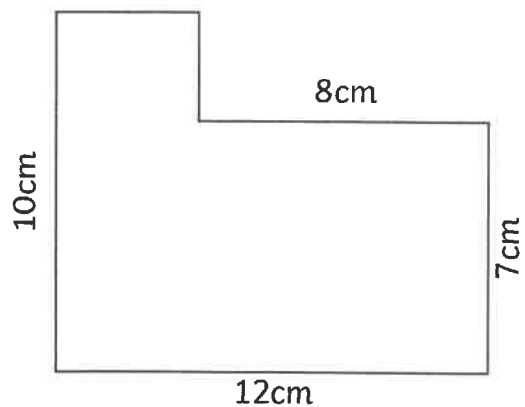
Total: _____

5.



Total: _____

6.



Total: _____

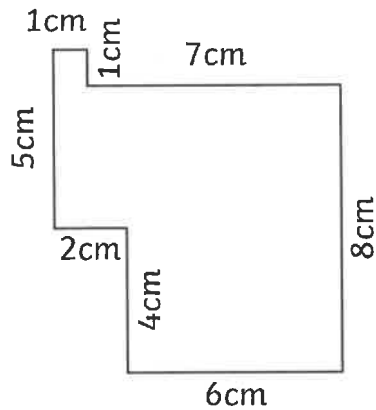
Note: Compound shapes are not to scale.

Area of Compound Shapes

I can calculate the area of compound shapes.

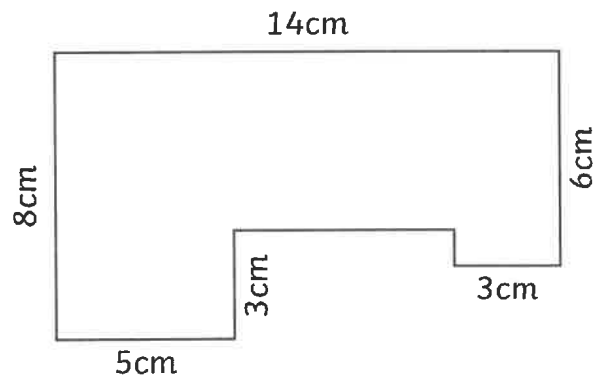
Identify the shapes where the area can be calculated. Calculate the area of each compound shape.

7.



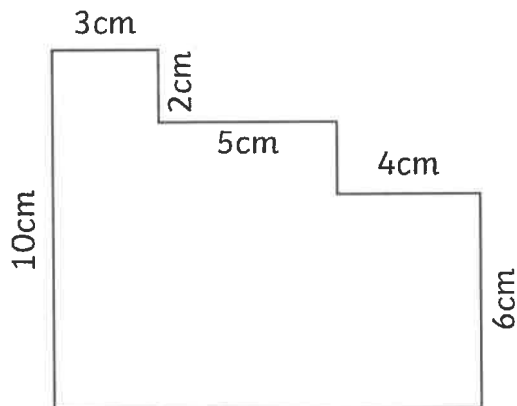
Total: _____

8.



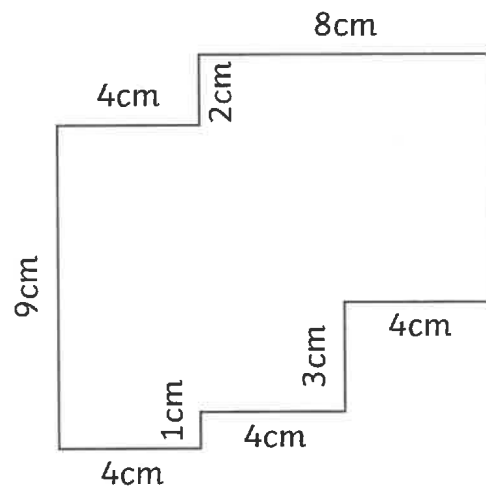
Total: _____

9.



Total: _____

10.



Total: _____

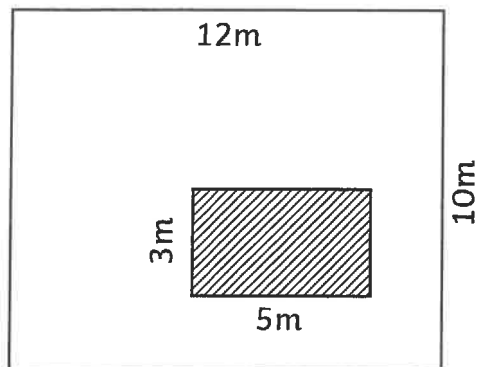
Note: Compound shapes are not to scale.

Area of Compound Shapes

I can calculate the area of compound shapes.

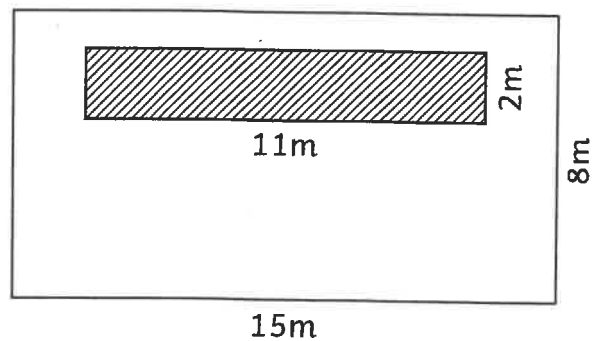
Identify the shapes where the area can be calculated. Calculate the area of each compound shape.

1.



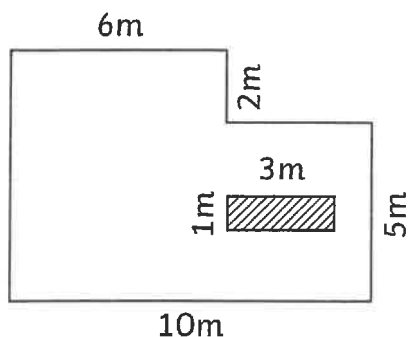
Total: _____

2.



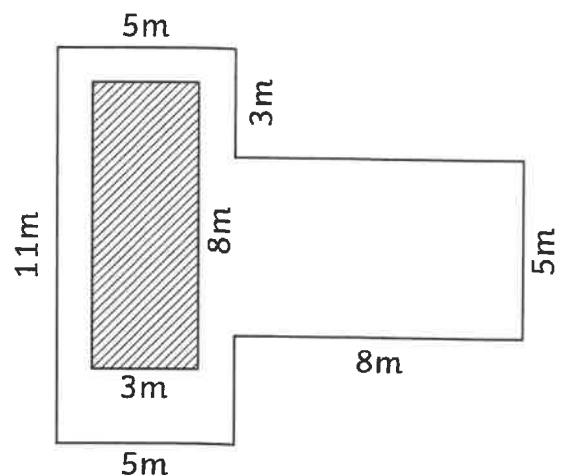
Total: _____

3.



Total: _____

4.



Total: _____

Note: Compound shapes are not to scale.

