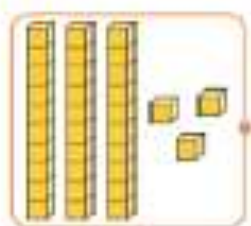
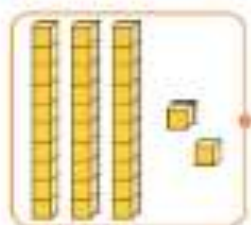
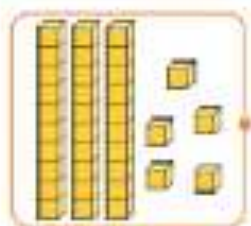
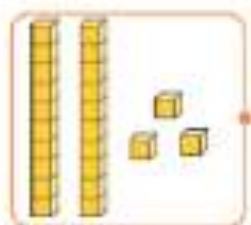


Number Representations to 40 Match Up

Draw a line to match the boats to the correct number representation.



Put the numbers in order from smallest to greatest on the blank ships.

