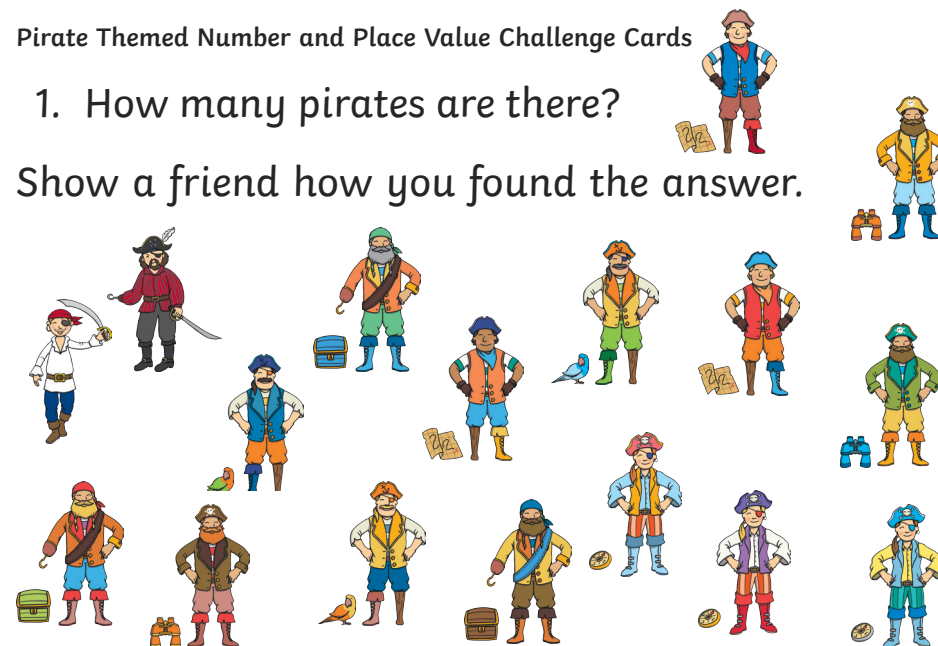


Pirate Themed Number and Place Value Challenge Cards

1. How many pirates are there?


Show a friend how you found the answer.



Pirate Themed Number and Place Value Challenge Cards

2. How many swords are there?

Show a friend how you found the answer.



Pirate Themed Number and Place Value Challenge Cards

3. Barnacle Bella is watching out for ships from the crow's nest using her telescope. This is what she can see.

She spots one more ship sailing around the cliffs. How many ships can she see now? Tell a friend how you found the answer.



Pirate Themed Number and Place Value Challenge Cards

4. Pirate Paul has collected some bags of coins.

Each bag contains 5 coins. How many coins does he have altogether?



How did you find the answer?

Was there a quicker way to find the answer?

Pirate Themed Number and Place Value Challenge Cards

5. How many earrings can you see?




How did you find the answer?

Was there a quicker way to find the answer?

Cards Title Pirate Themed Number and Place Value Challenge Cards

6. Toothless Tom is counting his treasure.

13, 14 ...



What number will he say next?

Write your answer in numerals and in words!

Pirate Themed Number and Place Value Challenge Cards


7. Scurvy Sam's parrot can say 12 words.
Dubloon Dora's parrot can say one word more.

How many words can
Doubloon Dora's parrot
say? Write your answer
in numerals and in words!



Pirate Themed Number and Place Value Challenge Cards

8. Captain Cara knows that key **sixteen** will open her treasure chest. Which key should she use?



Pirate Themed Number and Place Value Challenge Cards

9. Swashbuckling Sahad is counting his treasure.


56, 57 ...

What number will he say next?



Cards Title Pirate Themed Number and Place Value Challenge Cards

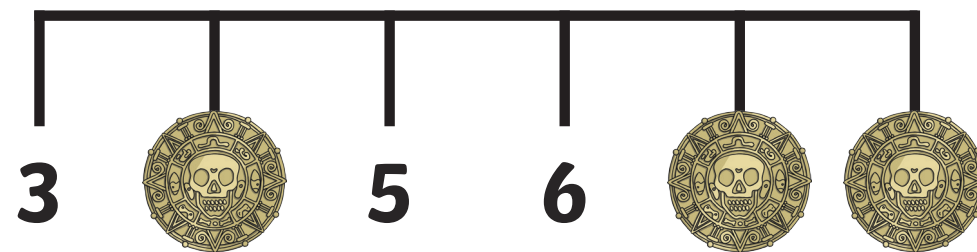
10. Anne Bonny has sorted her gold coins into piles of 10.



How many coins does she have? She finds 4 more coins. How many does she have now?

Pirate Themed Number and Place Value Challenge Cards

11. Which numbers are hiding behind the coins?



Which coin did you fill in first? Explain why.

Year 1 Pirate Themed Number and Place Value Challenge Cards **Answers**

1. 17
2. 12
3. 8
4. 30 coins
5. 14
6. 15, fifteen
7. 13, thirteen
8. 16
9. 58
10. 50, 54
11. 4, 7, 8